




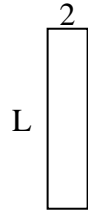
Calcola il valore di 'L'.

Risposte

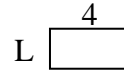
1) Area = $30u^2$



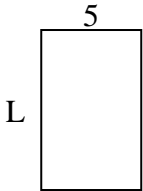
2) Area = $18u^2$



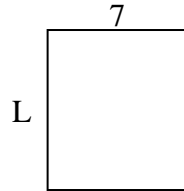
3) Area = $8u^2$



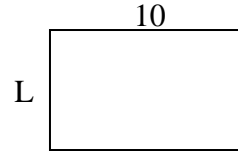
4) Area = $40u^2$



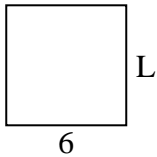
5) Area = $56u^2$



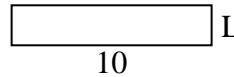
6) Area = $60u^2$



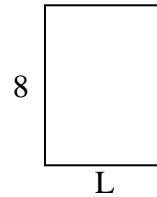
7) Area = $36u^2$



8) Area = $20u^2$



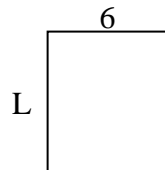
9) Area = $48u^2$



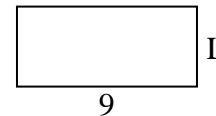
10) Area = $9u^2$



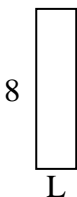
11) Area = $42u^2$



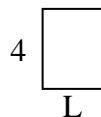
12) Area = $36u^2$



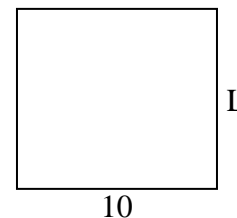
13) Area = $16u^2$



14) Area = $12u^2$



15) Area = $90u^2$

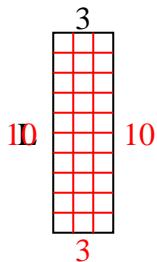


1. _____
2. _____
3. _____
4. _____
5. _____
6. _____
7. _____
8. _____
9. _____
10. _____
11. _____
12. _____
13. _____
14. _____
15. _____

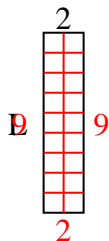


Calcola il valore di 'L'.

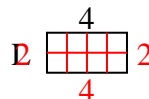
1) Area = $30u^2$



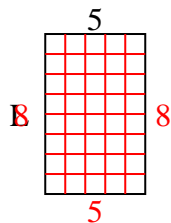
2) Area = $18u^2$



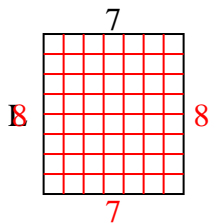
3) Area = $8u^2$



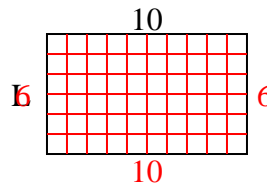
4) Area = $40u^2$



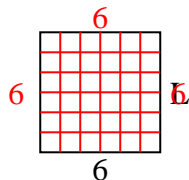
5) Area = $56u^2$



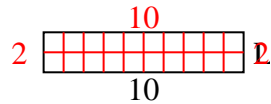
6) Area = $60u^2$



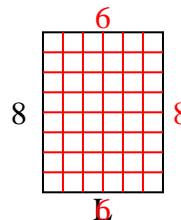
7) Area = $36u^2$



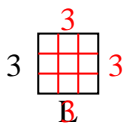
8) Area = $20u^2$



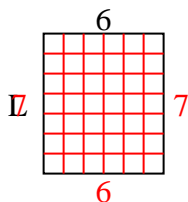
9) Area = $48u^2$



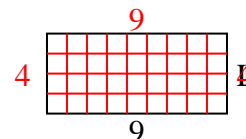
10) Area = $9u^2$



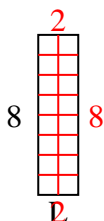
11) Area = $42u^2$



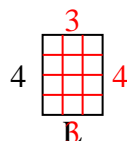
12) Area = $36u^2$



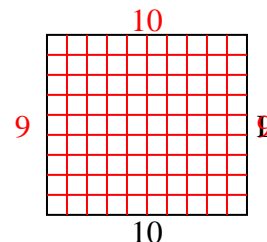
13) Area = $16u^2$



14) Area = $12u^2$



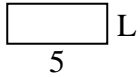
15) Area = $90u^2$

**Risposte**1. 102. 93. 24. 85. 86. 67. 68. 29. 610. 311. 712. 413. 214. 315. 9

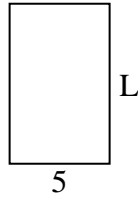


Calcola il valore di 'L'.

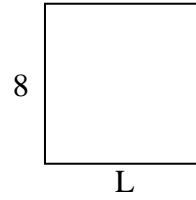
1) Area = $10u^2$



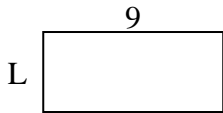
2) Area = $40u^2$



3) Area = $64u^2$



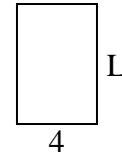
4) Area = $36u^2$



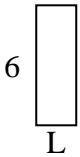
5) Area = $12u^2$




6) Area = $24u^2$



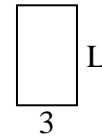
7) Area = $12u^2$



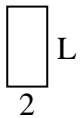
8) Area = $20u^2$



9) Area = $15u^2$



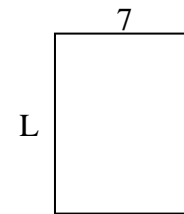
10) Area = $8u^2$



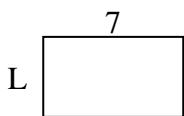
11) Area = $10u^2$



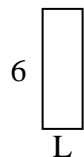
12) Area = $63u^2$



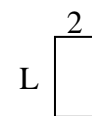
13) Area = $28u^2$



14) Area = $12u^2$



15) Area = $8u^2$

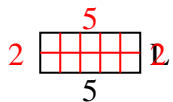
**Risposte**

1. _____
2. _____
3. _____
4. _____
5. _____
6. _____
7. _____
8. _____
9. _____
10. _____
11. _____
12. _____
13. _____
14. _____
15. _____

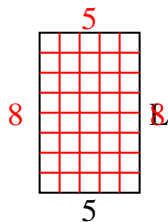


Calcola il valore di 'L'.

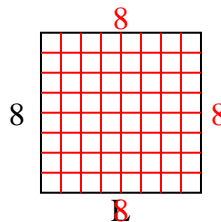
1) Area = $10u^2$



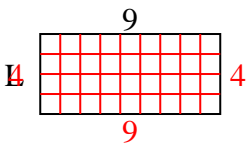
2) Area = $40u^2$



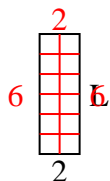
3) Area = $64u^2$



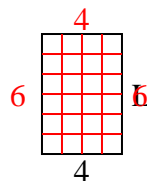
4) Area = $36u^2$



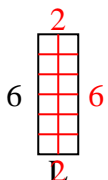
5) Area = $12u^2$



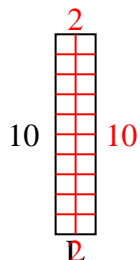
6) Area = $24u^2$



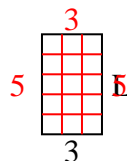
7) Area = $12u^2$



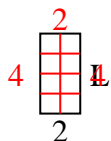
8) Area = $20u^2$



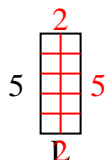
9) Area = $15u^2$



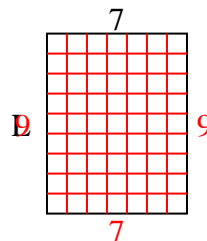
10) Area = $8u^2$



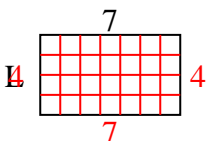
11) Area = $10u^2$



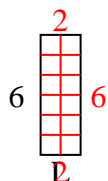
12) Area = $63u^2$



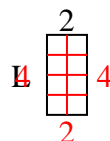
13) Area = $28u^2$



14) Area = $12u^2$



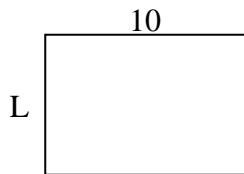
15) Area = $8u^2$

**Risposte**1. 22. 83. 84. 45. 66. 67. 28. 29. 510. 411. 212. 913. 414. 215. 4

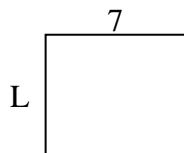


Calcola il valore di 'L'.

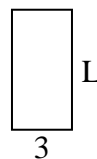
1) Area = $70u^2$



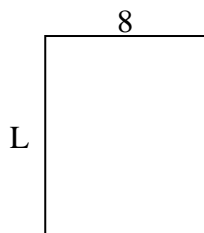
2) Area = $42u^2$



3) Area = $18u^2$



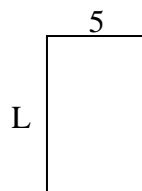
4) Area = $80u^2$



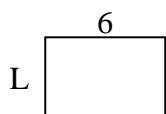
5) Area = $18u^2$




6) Area = $40u^2$



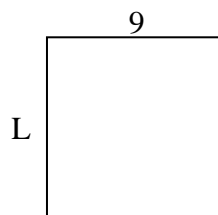
7) Area = $24u^2$



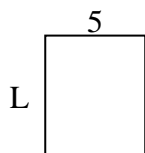
8) Area = $60u^2$



9) Area = $81u^2$



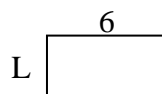
10) Area = $30u^2$



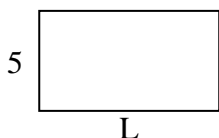
11) Area = $9u^2$




12) Area = $18u^2$



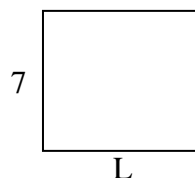
13) Area = $45u^2$



14) Area = $32u^2$



15) Area = $56u^2$

**Risposte**

1. _____

2. _____

3. _____

4. _____

5. _____

6. _____

7. _____

8. _____

9. _____

10. _____

11. _____

12. _____

13. _____

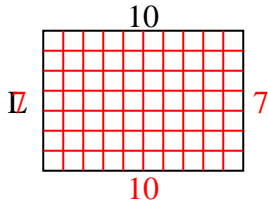
14. _____

15. _____

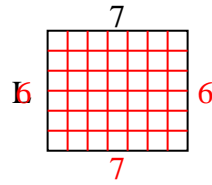


Calcola il valore di 'L'.

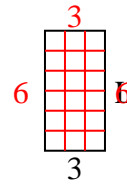
1) Area = $70u^2$



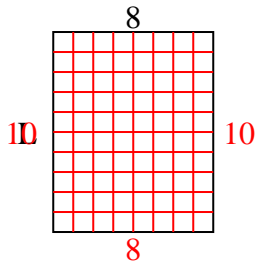
2) Area = $42u^2$



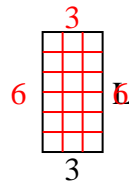
3) Area = $18u^2$



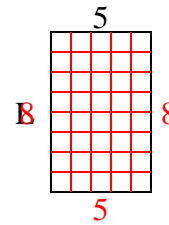
4) Area = $80u^2$



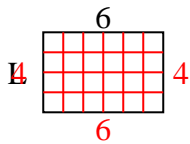
5) Area = $18u^2$



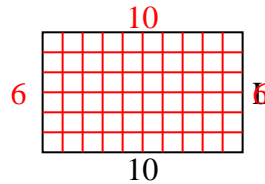
6) Area = $40u^2$



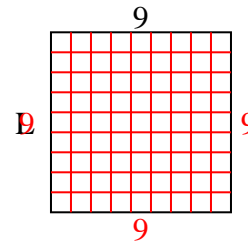
7) Area = $24u^2$



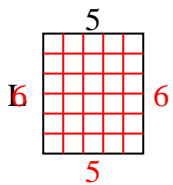
8) Area = $60u^2$



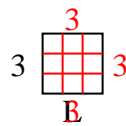
9) Area = $81u^2$



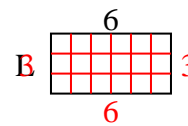
10) Area = $30u^2$



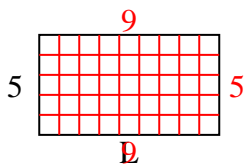
11) Area = $9u^2$



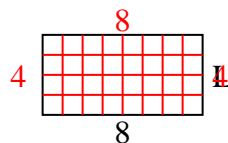
12) Area = $18u^2$



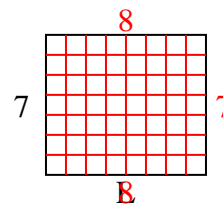
13) Area = $45u^2$



14) Area = $32u^2$



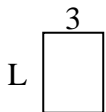
15) Area = $56u^2$

**Risposte**1. 72. 63. 64. 105. 66. 87. 48. 69. 910. 611. 312. 313. 914. 415. 8

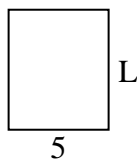


Calcola il valore di 'L'.

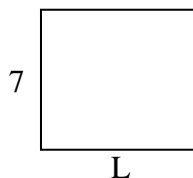
1) Area = $12u^2$



2) Area = $30u^2$



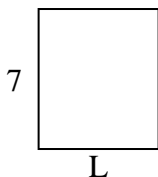
3) Area = $56u^2$



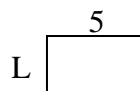
4) Area = $20u^2$



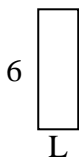
5) Area = $42u^2$




6) Area = $15u^2$



7) Area = $12u^2$



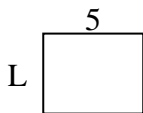
8) Area = $60u^2$



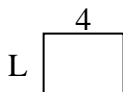
9) Area = $36u^2$



10) Area = $20u^2$




11) Area = $12u^2$



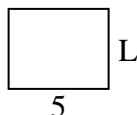
12) Area = $32u^2$



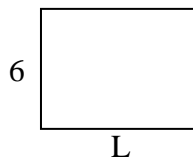
13) Area = $16u^2$



14) Area = $20u^2$



15) Area = $48u^2$

**Risposte**

1. _____

2. _____

3. _____

4. _____

5. _____

6. _____

7. _____

8. _____

9. _____

10. _____

11. _____

12. _____

13. _____

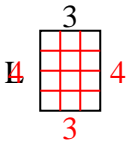
14. _____

15. _____

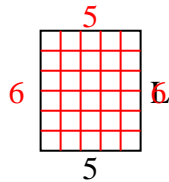


Calcola il valore di 'L'.

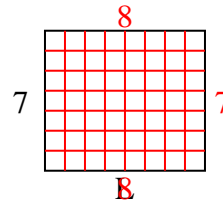
1) Area = $12u^2$



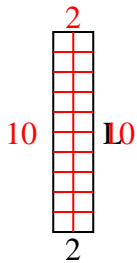
2) Area = $30u^2$



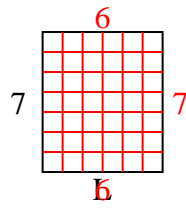
3) Area = $56u^2$



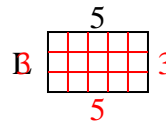
4) Area = $20u^2$



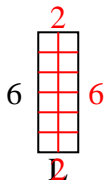
5) Area = $42u^2$



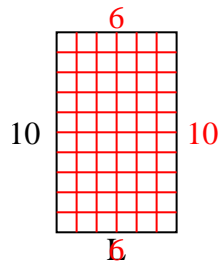
6) Area = $15u^2$



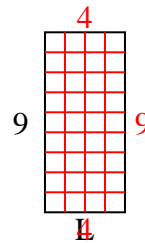
7) Area = $12u^2$



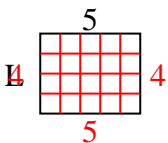
8) Area = $60u^2$



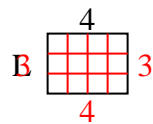
9) Area = $36u^2$



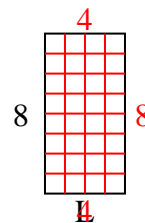
10) Area = $20u^2$



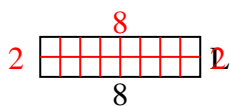
11) Area = $12u^2$



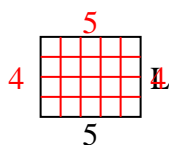
12) Area = $32u^2$



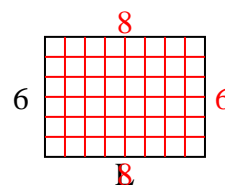
13) Area = $16u^2$



14) Area = $20u^2$



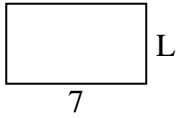
15) Area = $48u^2$

**Risposte**1. 42. 63. 84. 105. 66. 37. 28. 69. 410. 411. 312. 413. 214. 415. 8

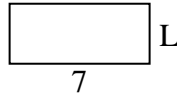


Calcola il valore di 'L'.

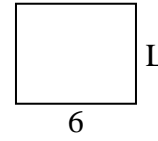
1) Area = $28u^2$



2) Area = $21u^2$



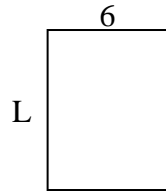
3) Area = $30u^2$



4) Area = $12u^2$




5) Area = $48u^2$



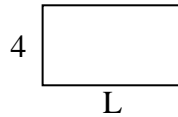
6) Area = $6u^2$



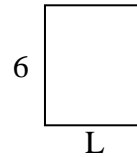
7) Area = $18u^2$



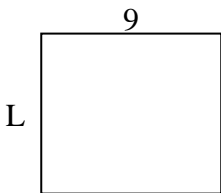
8) Area = $28u^2$



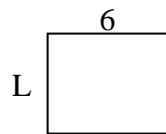
9) Area = $30u^2$



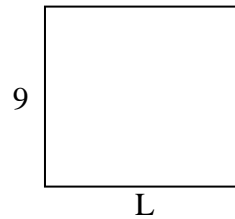
10) Area = $72u^2$



11) Area = $30u^2$



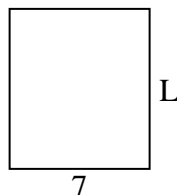
12) Area = $90u^2$



13) Area = $30u^2$



14) Area = $56u^2$



15) Area = $54u^2$

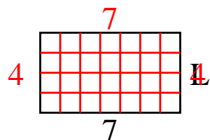
**Risposte**

1. _____
2. _____
3. _____
4. _____
5. _____
6. _____
7. _____
8. _____
9. _____
10. _____
11. _____
12. _____
13. _____
14. _____
15. _____

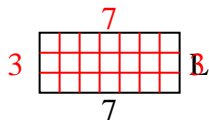


Calcola il valore di 'L'.

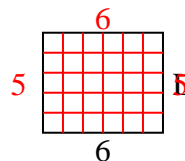
1) Area = $28u^2$



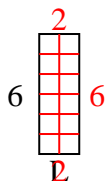
2) Area = $21u^2$



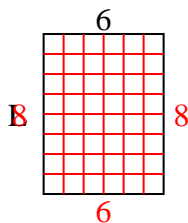
3) Area = $30u^2$



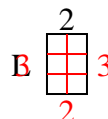
4) Area = $12u^2$



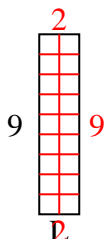
5) Area = $48u^2$



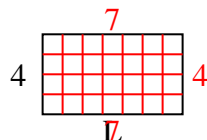
6) Area = $6u^2$



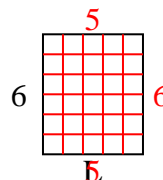
7) Area = $18u^2$



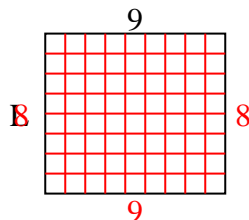
8) Area = $28u^2$



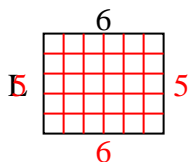
9) Area = $30u^2$



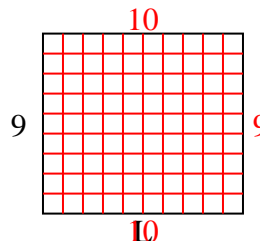
10) Area = $72u^2$



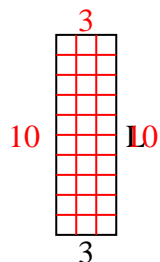
11) Area = $30u^2$



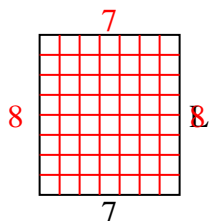
12) Area = $90u^2$



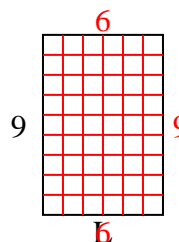
13) Area = $30u^2$



14) Area = $56u^2$



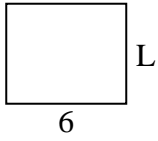
15) Area = $54u^2$

**Risposte**1. 42. 33. 54. 25. 86. 37. 28. 79. 510. 811. 512. 1013. 1014. 815. 6

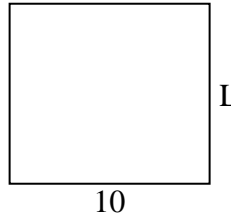


Calcola il valore di 'L'.

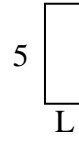
1) Area = $30u^2$



2) Area = $90u^2$



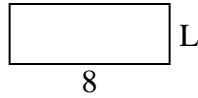
3) Area = $10u^2$



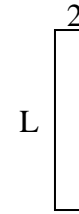
4) Area = $14u^2$



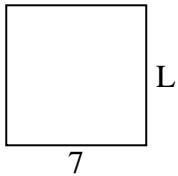
5) Area = $24u^2$



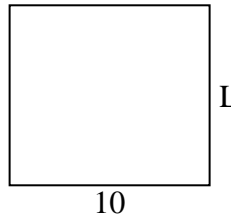
6) Area = $18u^2$



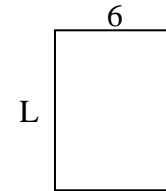
7) Area = $49u^2$



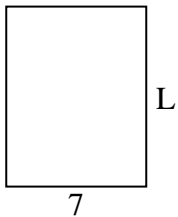
8) Area = $90u^2$



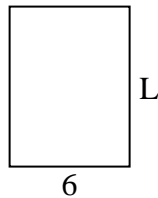
9) Area = $48u^2$



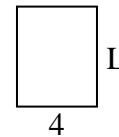
10) Area = $63u^2$



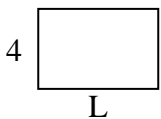
11) Area = $48u^2$



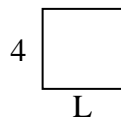
12) Area = $20u^2$



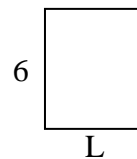
13) Area = $24u^2$



14) Area = $16u^2$



15) Area = $30u^2$

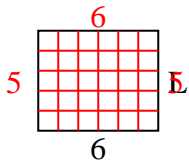
**Risposte**

1. _____
2. _____
3. _____
4. _____
5. _____
6. _____
7. _____
8. _____
9. _____
10. _____
11. _____
12. _____
13. _____
14. _____
15. _____

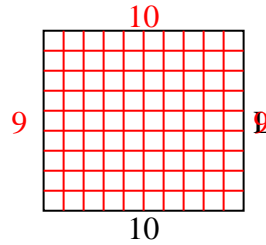


Calcola il valore di 'L'.

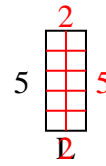
1) Area = $30u^2$



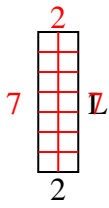
2) Area = $90u^2$



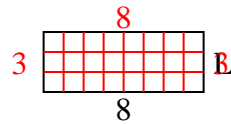
3) Area = $10u^2$



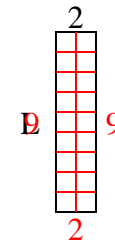
4) Area = $14u^2$



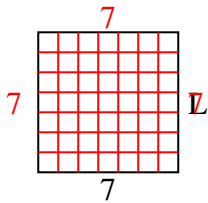
5) Area = $24u^2$



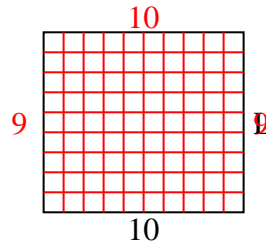
6) Area = $18u^2$



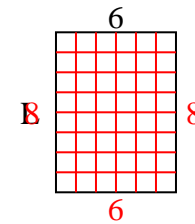
7) Area = $49u^2$



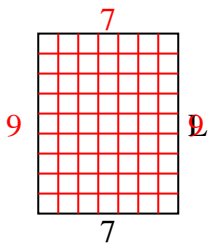
8) Area = $90u^2$



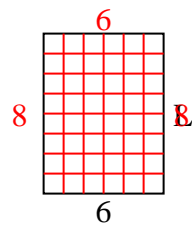
9) Area = $48u^2$



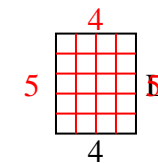
10) Area = $63u^2$



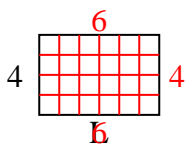
11) Area = $48u^2$



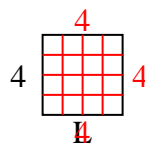
12) Area = $20u^2$



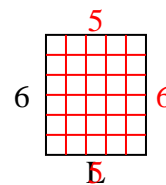
13) Area = $24u^2$



14) Area = $16u^2$



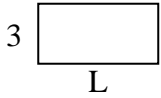
15) Area = $30u^2$

**Risposte**1. 52. 93. 24. 75. 36. 97. 78. 99. 810. 911. 812. 513. 614. 415. 5

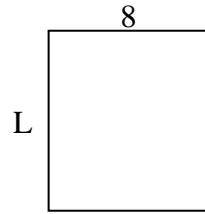


Calcola il valore di 'L'.

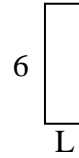
1) Area = $18u^2$



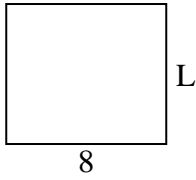
2) Area = $72u^2$



3) Area = $12u^2$



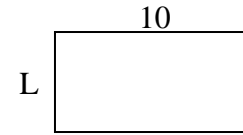
4) Area = $56u^2$



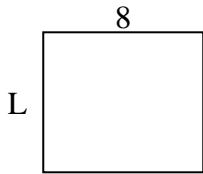
5) Area = $6u^2$



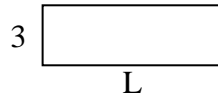
6) Area = $50u^2$



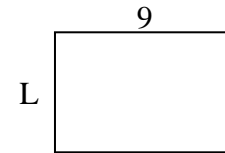
7) Area = $56u^2$



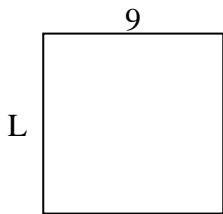
8) Area = $27u^2$



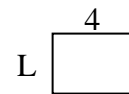
9) Area = $54u^2$



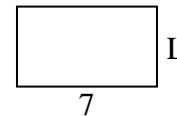
10) Area = $81u^2$



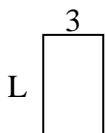
11) Area = $12u^2$




12) Area = $28u^2$



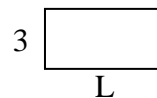
13) Area = $15u^2$



14) Area = $20u^2$



15) Area = $18u^2$

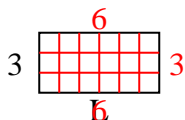
**Risposte**

1. _____
2. _____
3. _____
4. _____
5. _____
6. _____
7. _____
8. _____
9. _____
10. _____
11. _____
12. _____
13. _____
14. _____
15. _____

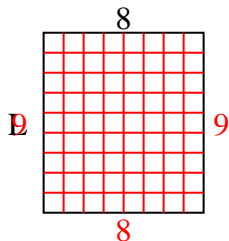


Calcola il valore di 'L'.

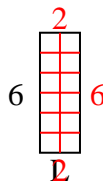
1) Area = $18u^2$



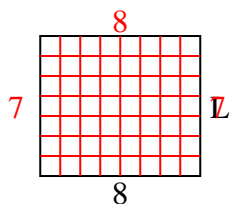
2) Area = $72u^2$



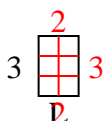
3) Area = $12u^2$



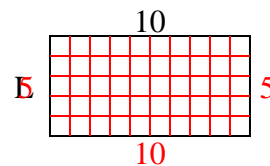
4) Area = $56u^2$



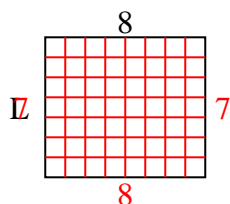
5) Area = $6u^2$



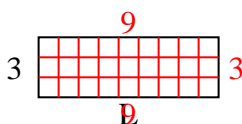
6) Area = $50u^2$



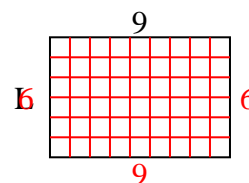
7) Area = $56u^2$



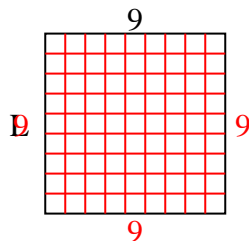
8) Area = $27u^2$



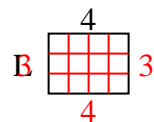
9) Area = $54u^2$



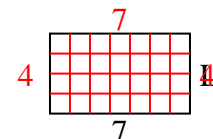
10) Area = $81u^2$



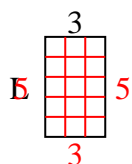
11) Area = $12u^2$



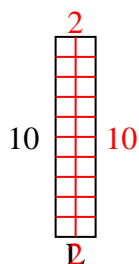
12) Area = $28u^2$



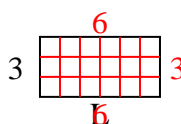
13) Area = $15u^2$



14) Area = $20u^2$



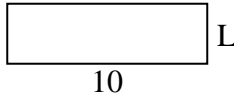
15) Area = $18u^2$

**Risposte**1. 62. 93. 24. 75. 26. 57. 78. 99. 610. 911. 312. 413. 514. 215. 6

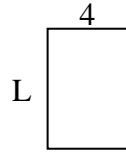


Calcola il valore di 'L'.

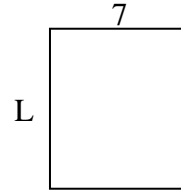
1) Area = $30u^2$



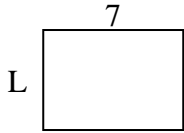
2) Area = $24u^2$



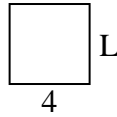
3) Area = $56u^2$



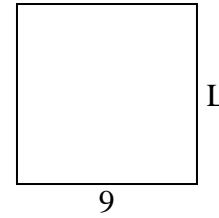
4) Area = $35u^2$



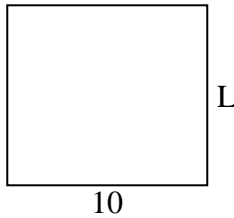
5) Area = $16u^2$



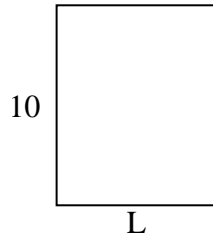
6) Area = $81u^2$



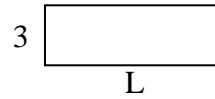
7) Area = $90u^2$




8) Area = $80u^2$



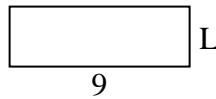
9) Area = $27u^2$




10) Area = $32u^2$



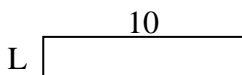
11) Area = $27u^2$



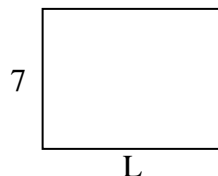
12) Area = $14u^2$



13) Area = $20u^2$



14) Area = $63u^2$



15) Area = $18u^2$

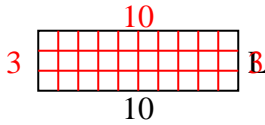
**Risposte**

1. _____
2. _____
3. _____
4. _____
5. _____
6. _____
7. _____
8. _____
9. _____
10. _____
11. _____
12. _____
13. _____
14. _____
15. _____

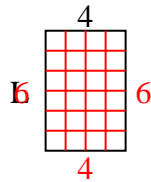


Calcola il valore di 'L'.

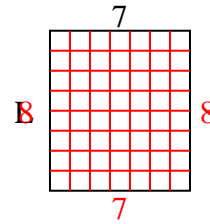
1) Area = $30u^2$



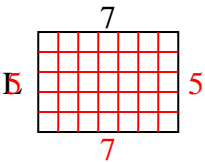
2) Area = $24u^2$



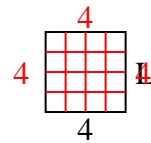
3) Area = $56u^2$



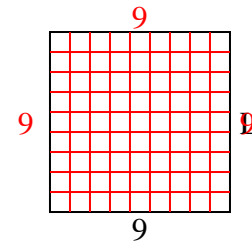
4) Area = $35u^2$



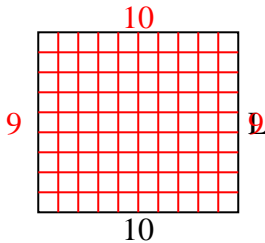
5) Area = $16u^2$



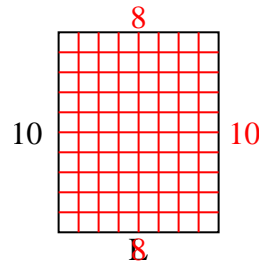
6) Area = $81u^2$



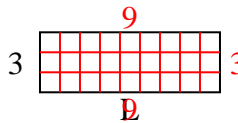
7) Area = $90u^2$



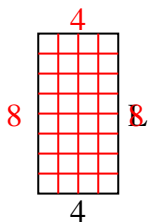
8) Area = $80u^2$



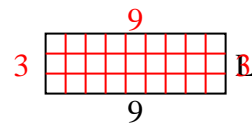
9) Area = $27u^2$



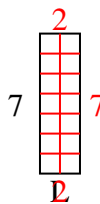
10) Area = $32u^2$



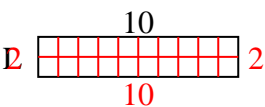
11) Area = $27u^2$



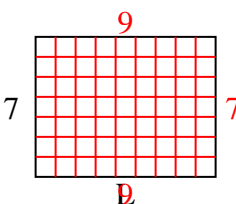
12) Area = $14u^2$



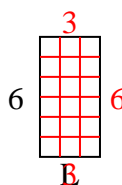
13) Area = $20u^2$



14) Area = $63u^2$



15) Area = $18u^2$

**Risposte**1. 32. 63. 84. 55. 46. 97. 98. 89. 910. 811. 312. 213. 214. 915. 3

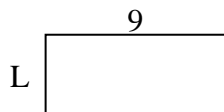


Calcola il valore di 'L'.

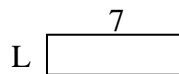
1) Area = $8u^2$



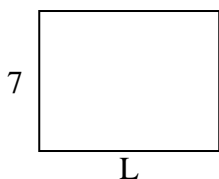
2) Area = $36u^2$



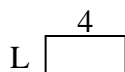
3) Area = $14u^2$



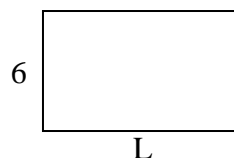
4) Area = $63u^2$



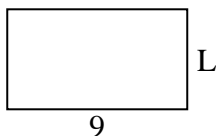
5) Area = $8u^2$




6) Area = $60u^2$



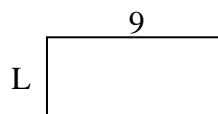
7) Area = $45u^2$



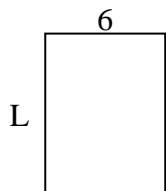
8) Area = $20u^2$



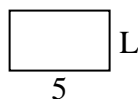
9) Area = $36u^2$



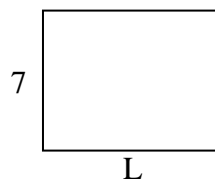
10) Area = $48u^2$



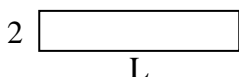
11) Area = $15u^2$



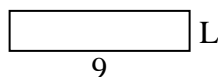
12) Area = $63u^2$



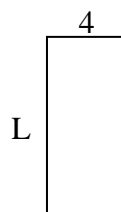
13) Area = $20u^2$



14) Area = $18u^2$



15) Area = $36u^2$

**Risposte**

1. _____

2. _____

3. _____

4. _____

5. _____

6. _____

7. _____

8. _____

9. _____

10. _____

11. _____

12. _____

13. _____

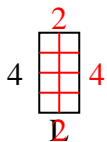
14. _____

15. _____

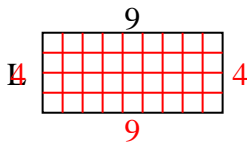


Calcola il valore di 'L'.

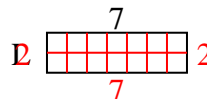
1) Area = $8u^2$



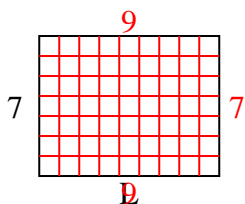
2) Area = $36u^2$



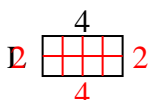
3) Area = $14u^2$



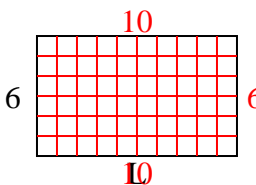
4) Area = $63u^2$



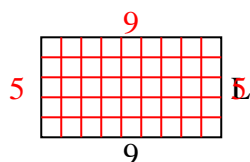
5) Area = $8u^2$



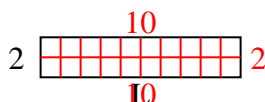
6) Area = $60u^2$



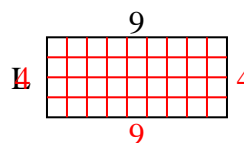
7) Area = $45u^2$



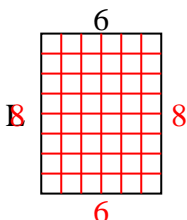
8) Area = $20u^2$



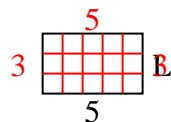
9) Area = $36u^2$



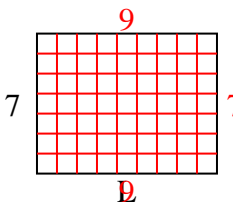
10) Area = $48u^2$



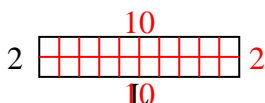
11) Area = $15u^2$



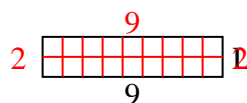
12) Area = $63u^2$



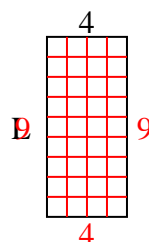
13) Area = $20u^2$



14) Area = $18u^2$



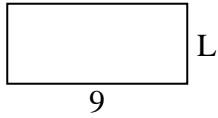
15) Area = $36u^2$

**Risposte**1. 22. 43. 24. 95. 26. 107. 58. 109. 410. 811. 312. 913. 1014. 215. 9

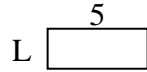


Calcola il valore di 'L'.


1) Area = $36u^2$



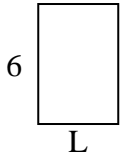
2) Area = $10u^2$



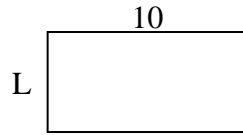
3) Area = $14u^2$



4) Area = $24u^2$



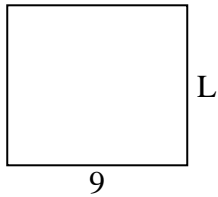
5) Area = $50u^2$



6) Area = $6u^2$



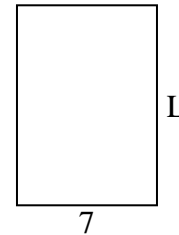
7) Area = $72u^2$



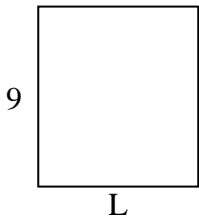
8) Area = $27u^2$



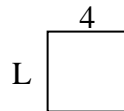
9) Area = $70u^2$



10) Area = $72u^2$




11) Area = $16u^2$



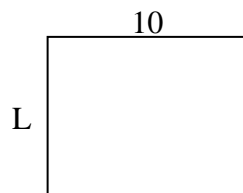
12) Area = $24u^2$



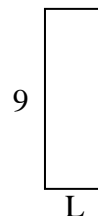
13) Area = $14u^2$



14) Area = $80u^2$



15) Area = $27u^2$

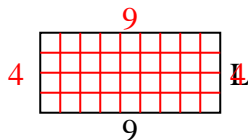
**Risposte**

1. _____
2. _____
3. _____
4. _____
5. _____
6. _____
7. _____
8. _____
9. _____
10. _____
11. _____
12. _____
13. _____
14. _____
15. _____

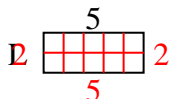


Calcola il valore di 'L'.

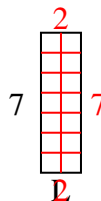
1) Area = $36u^2$



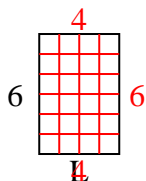
2) Area = $10u^2$



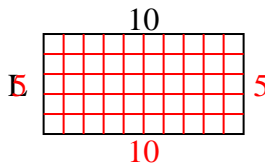
3) Area = $14u^2$



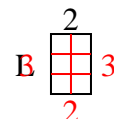
4) Area = $24u^2$



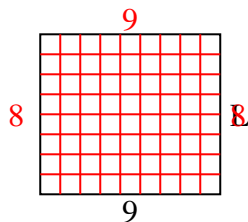
5) Area = $50u^2$



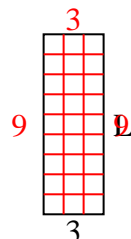
6) Area = $6u^2$



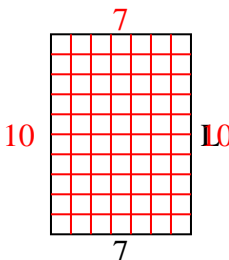
7) Area = $72u^2$



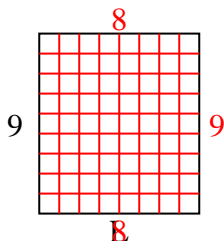
8) Area = $27u^2$



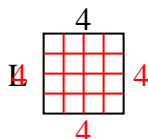
9) Area = $70u^2$



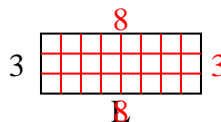
10) Area = $72u^2$



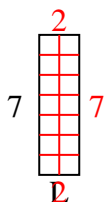
11) Area = $16u^2$



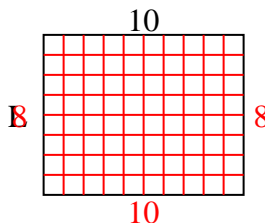
12) Area = $24u^2$



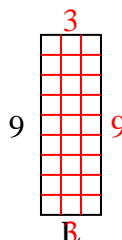
13) Area = $14u^2$



14) Area = $80u^2$



15) Area = $27u^2$

**Risposte**1. 42. 23. 24. 45. 56. 37. 88. 99. 1010. 811. 412. 813. 214. 815. 3