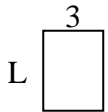


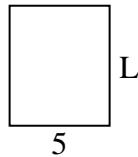


Calcola il valore di 'L'.

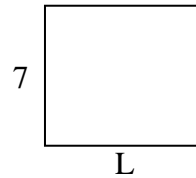
1) Area = $12u^2$



2) Area = $30u^2$



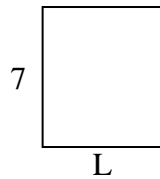
3) Area = $56u^2$



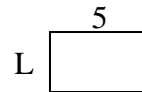
4) Area = $20u^2$



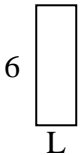
5) Area = $42u^2$



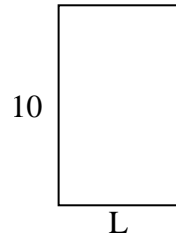
6) Area = $15u^2$




7) Area = $12u^2$



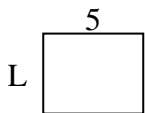
8) Area = $60u^2$



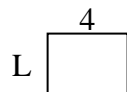
9) Area = $36u^2$



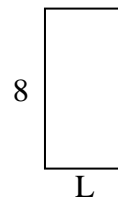
10) Area = $20u^2$



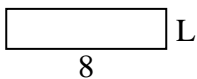
11) Area = $12u^2$



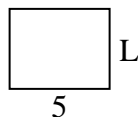
12) Area = $32u^2$



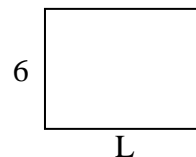
13) Area = $16u^2$



14) Area = $20u^2$



15) Area = $48u^2$

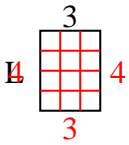
**Risposte**

1. _____
2. _____
3. _____
4. _____
5. _____
6. _____
7. _____
8. _____
9. _____
10. _____
11. _____
12. _____
13. _____
14. _____
15. _____

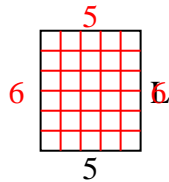


Calcola il valore di 'L'.

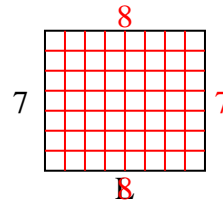
1) Area = $12u^2$



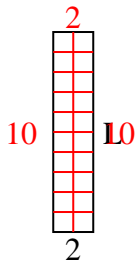
2) Area = $30u^2$



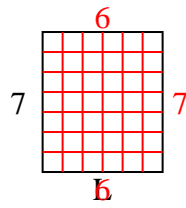
3) Area = $56u^2$



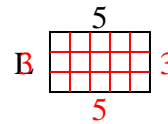
4) Area = $20u^2$



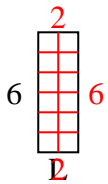
5) Area = $42u^2$



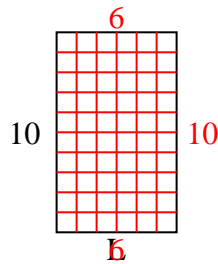
6) Area = $15u^2$



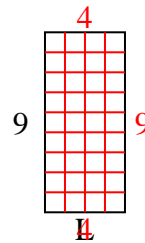
7) Area = $12u^2$



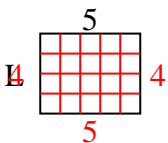
8) Area = $60u^2$



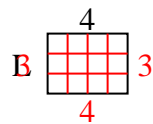
9) Area = $36u^2$



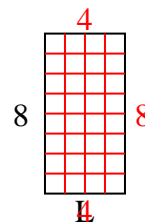
10) Area = $20u^2$



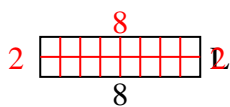
11) Area = $12u^2$



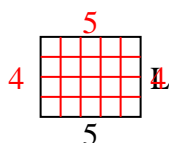
12) Area = $32u^2$



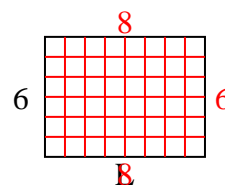
13) Area = $16u^2$



14) Area = $20u^2$



15) Area = $48u^2$

**Risposte**1. 42. 63. 84. 105. 66. 37. 28. 69. 410. 411. 312. 413. 214. 415. 8