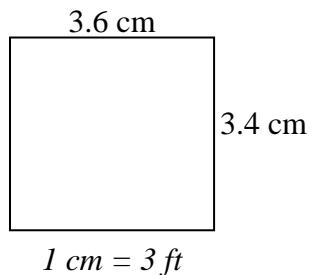




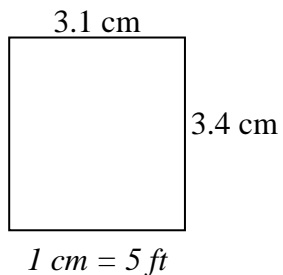
Determinare la larghezza, l'altezza e l'area effettive di ciascun rettangolo di scala.

Arrotonda l'area al numero intero più vicino.

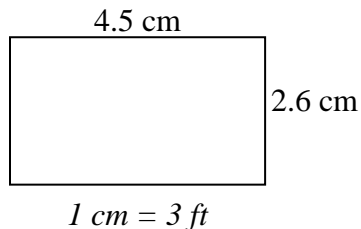
1)



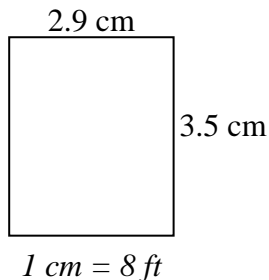
2)



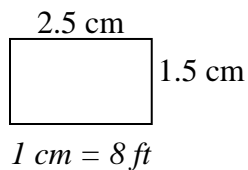
3)



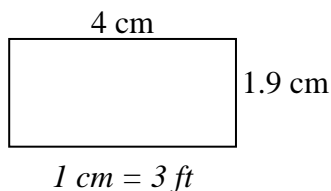
4)



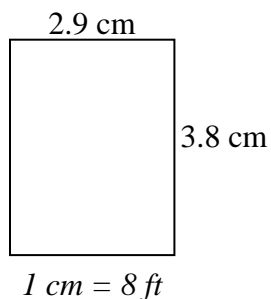
5)



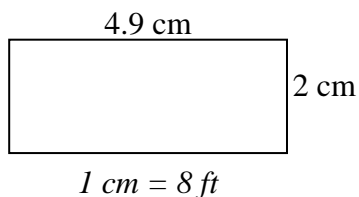
6)



7)



8)

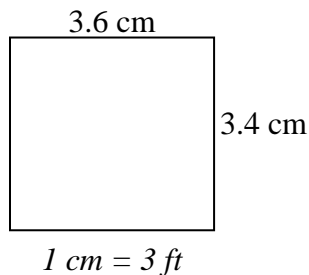


Risposte

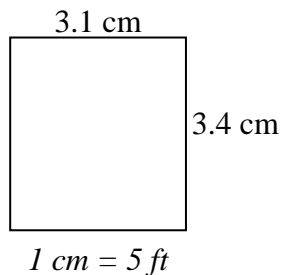
1. _____
2. _____
3. _____
4. _____
5. _____
6. _____
7. _____
8. _____

**Determinare la larghezza, l'altezza e l'area effettive di ciascun rettangolo di scala.****Arrotonda l'area al numero intero più vicino.**

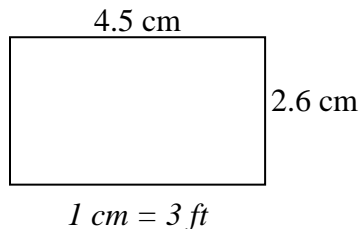
1)



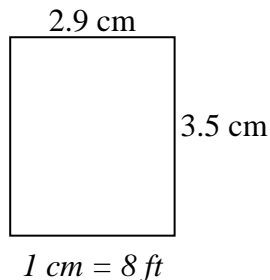
2)



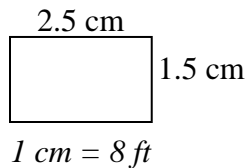
3)



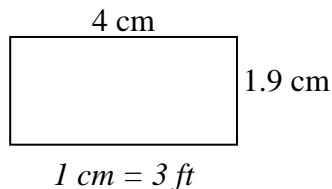
4)



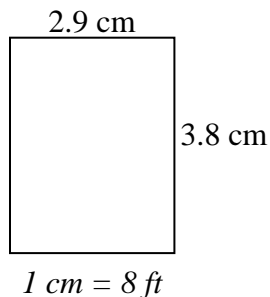
5)



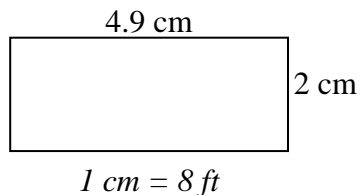
6)



7)



8)

**Risposte**

1.	<u>10.8</u>	<u>10.2</u>	<u>110</u>
2.	<u>15.5</u>	<u>17</u>	<u>264</u>
3.	<u>13.5</u>	<u>7.8</u>	<u>105</u>
4.	<u>23.2</u>	<u>28</u>	<u>650</u>
5.	<u>20</u>	<u>12</u>	<u>240</u>
6.	<u>12</u>	<u>5.7</u>	<u>68</u>
7.	<u>23.2</u>	<u>30.4</u>	<u>705</u>
8.	<u>39.2</u>	<u>16</u>	<u>627</u>