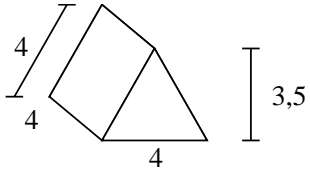


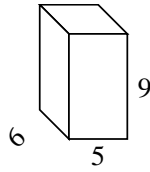


Calcola la superficie di ogni figura.

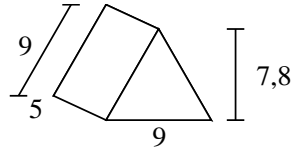
Es)



1)



2)



Risposte

Es. **62 cm²**

1. _____

2. _____

3. _____

4. _____

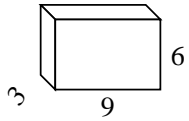
5. _____

6. _____

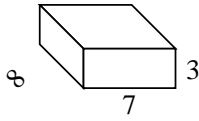
7. _____

8. _____

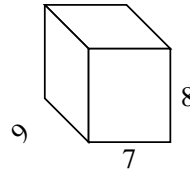
3)



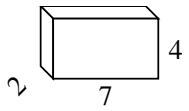
4)



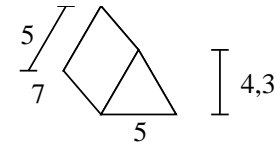
5)



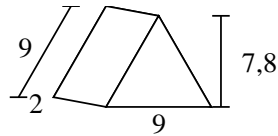
6)



7)

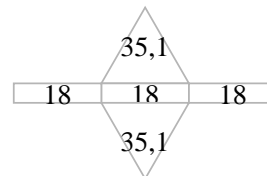
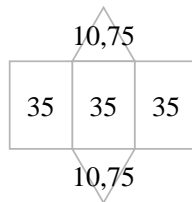
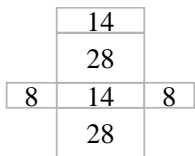
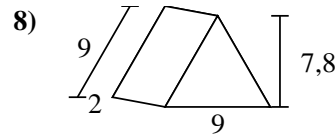
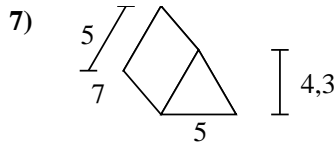
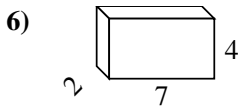
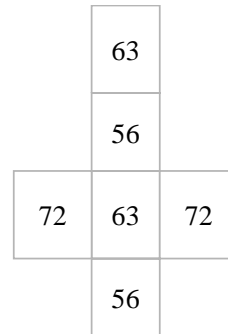
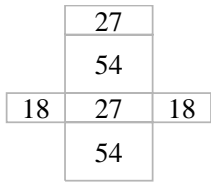
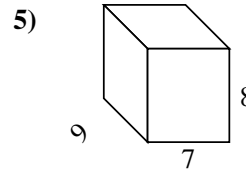
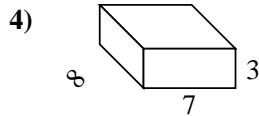
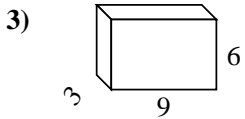
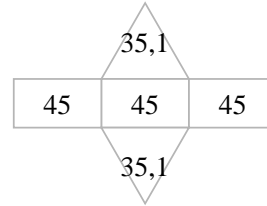
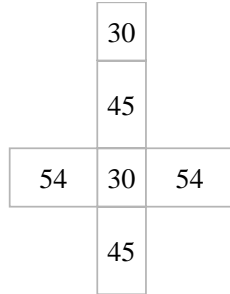
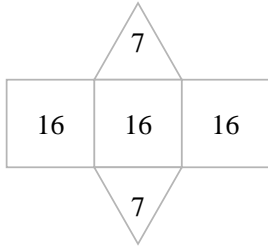
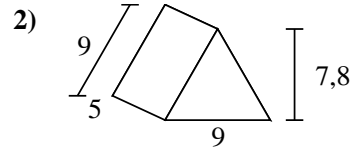
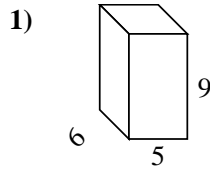
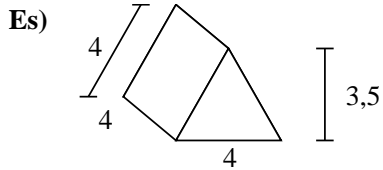


8)





Calcola la superficie di ogni figura.



Risposte

Es. 62 cm²

1. 258 cm²

2. 205,2 cm²

3. 198 cm²

4. 202 cm²

5. 382 cm²

6. 100 cm²

7. 126,5 cm²

8. 124,2 cm²