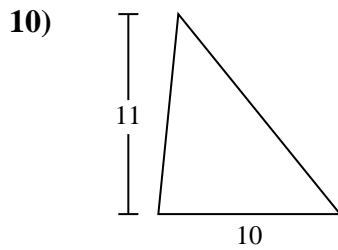
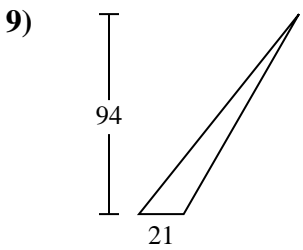
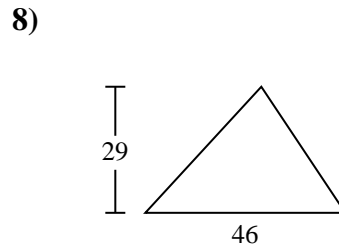
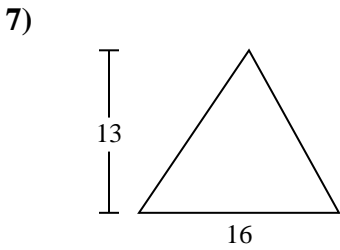
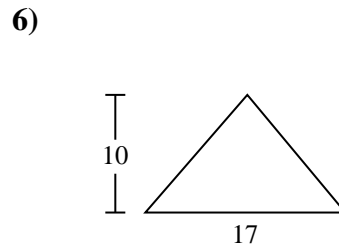
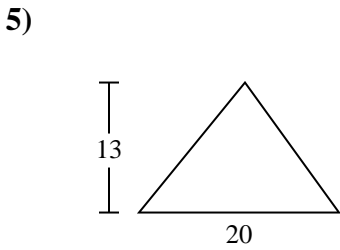
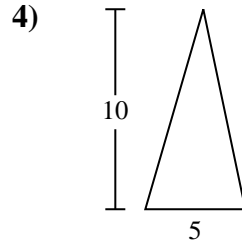
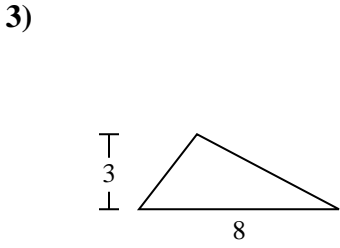
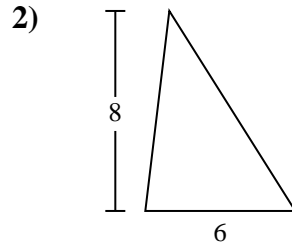
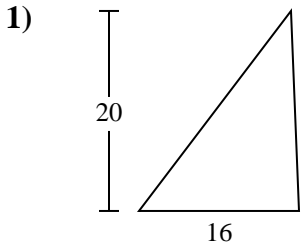




Trova l'area di ciascun traingoli. Le dimensioni non sono in scala.

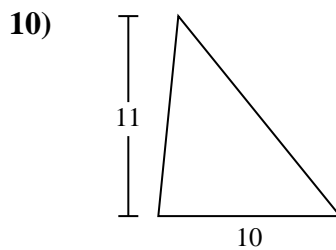
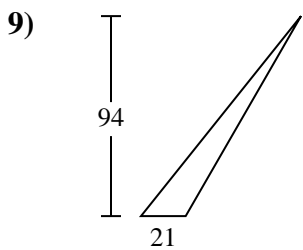
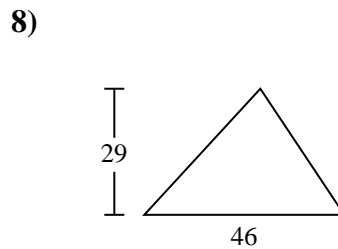
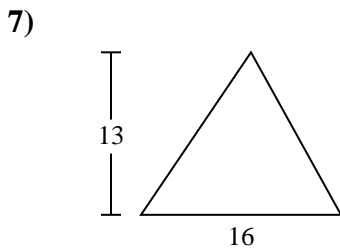
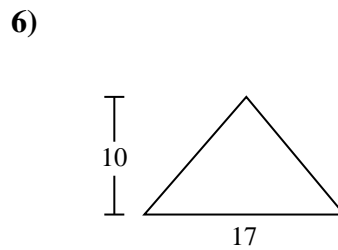
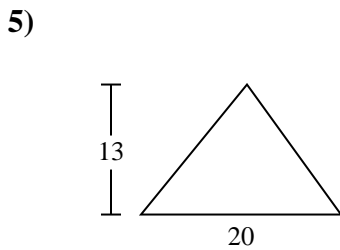
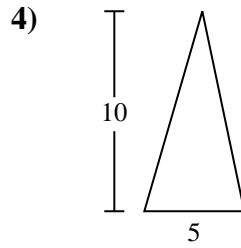
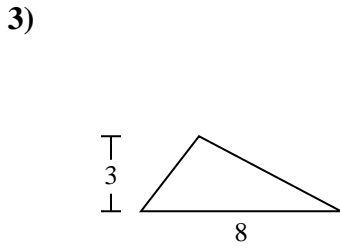
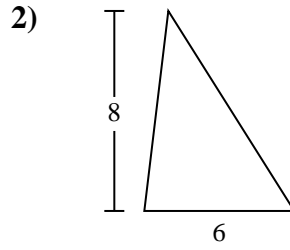
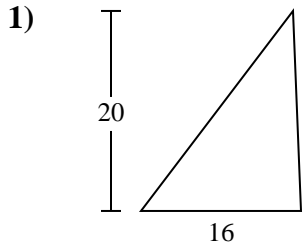


**Risposte**

- 1. \_\_\_\_\_
- 2. \_\_\_\_\_
- 3. \_\_\_\_\_
- 4. \_\_\_\_\_
- 5. \_\_\_\_\_
- 6. \_\_\_\_\_
- 7. \_\_\_\_\_
- 8. \_\_\_\_\_
- 9. \_\_\_\_\_
- 10. \_\_\_\_\_



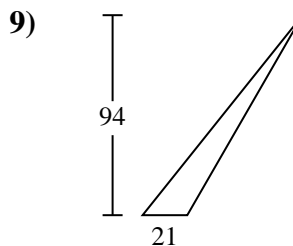
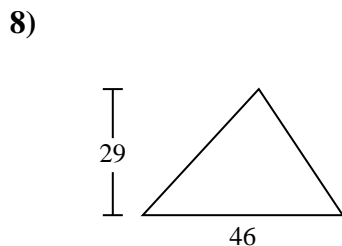
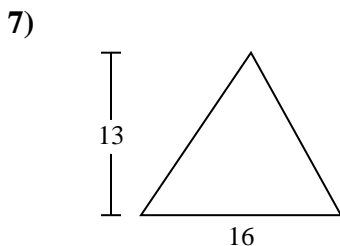
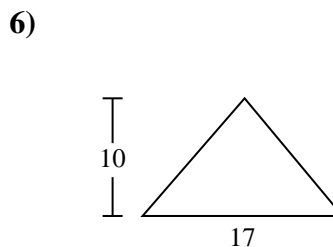
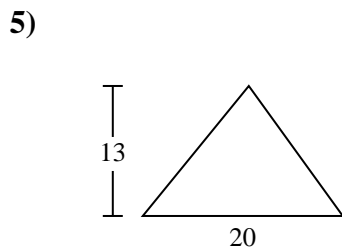
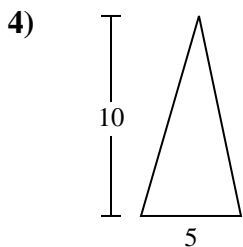
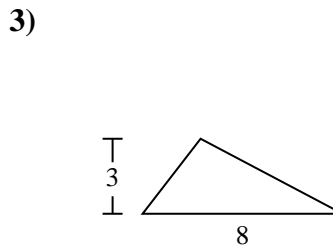
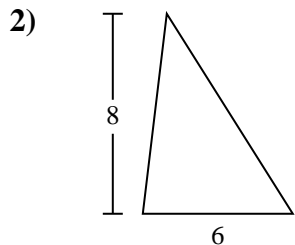
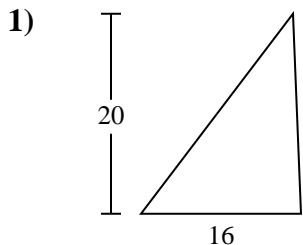
Trova l'area di ciascun traingoli. Le dimensioni non sono in scala.

**Risposte**1. 1602. 243. 124. 255. 1306. 857. 1048. 6679. 98710. 55



Trova l'area di ciascun traingoli. Le dimensioni non sono in scala.

25	160	85	24	667
987	104	12	130	



**Risposte**

1. \_\_\_\_\_
2. \_\_\_\_\_
3. \_\_\_\_\_
4. \_\_\_\_\_
5. \_\_\_\_\_
6. \_\_\_\_\_
7. \_\_\_\_\_
8. \_\_\_\_\_
9. \_\_\_\_\_