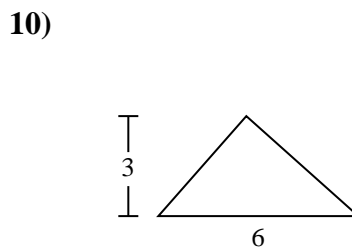
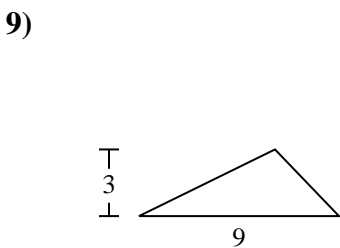
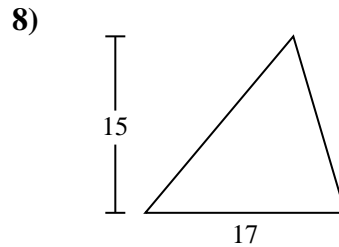
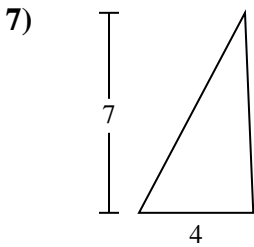
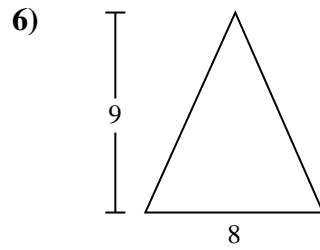
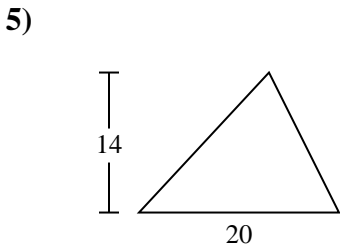
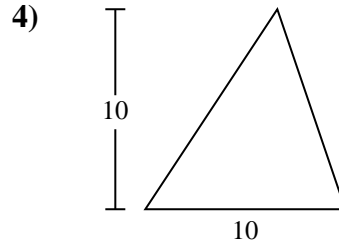
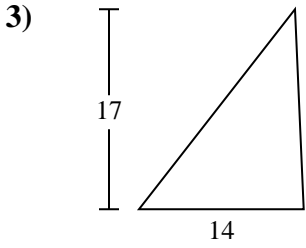
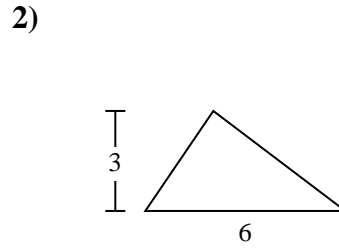
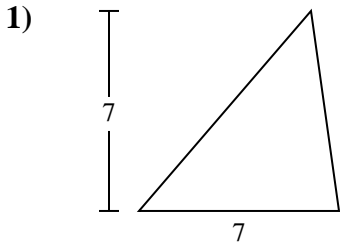




Trova l'area di ciascun traingoli. Le dimensioni non sono in scala.

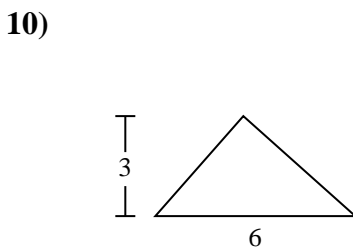
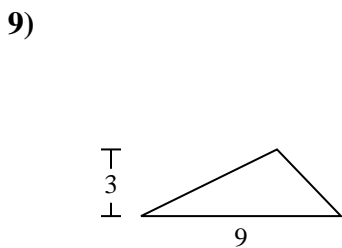
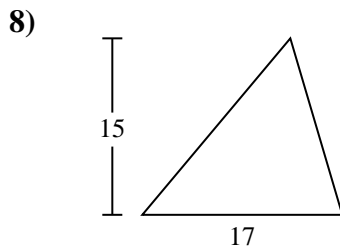
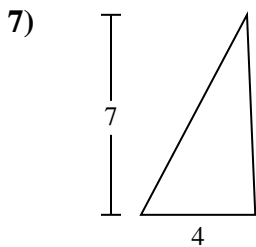
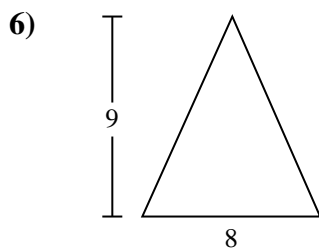
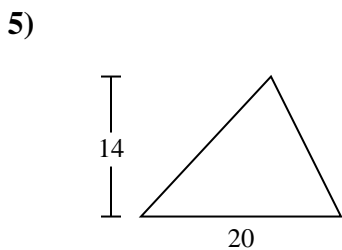
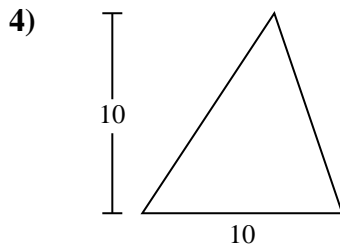
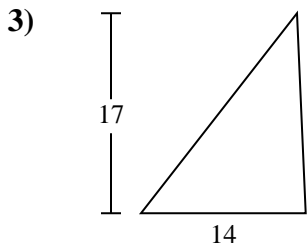
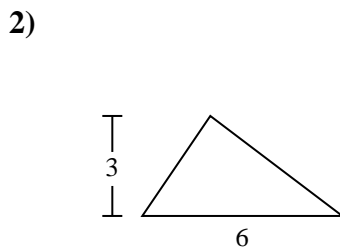
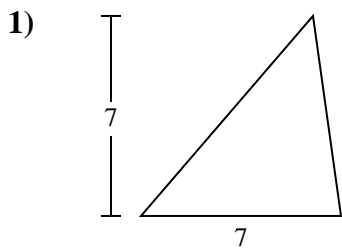


**Risposte**

- 1. \_\_\_\_\_
- 2. \_\_\_\_\_
- 3. \_\_\_\_\_
- 4. \_\_\_\_\_
- 5. \_\_\_\_\_
- 6. \_\_\_\_\_
- 7. \_\_\_\_\_
- 8. \_\_\_\_\_
- 9. \_\_\_\_\_
- 10. \_\_\_\_\_



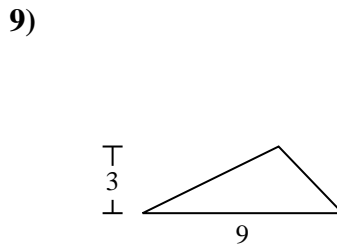
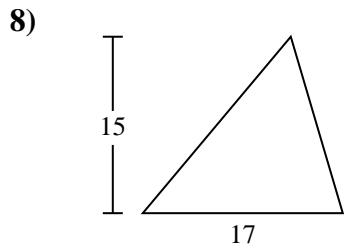
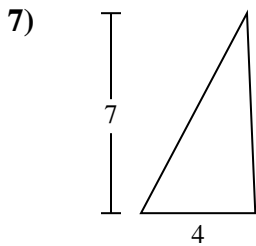
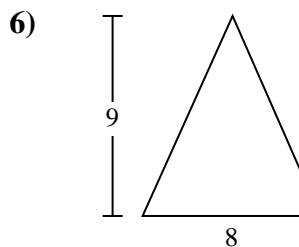
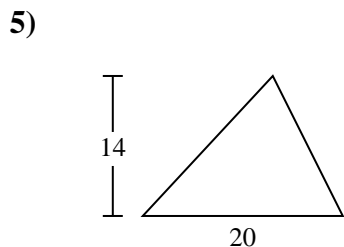
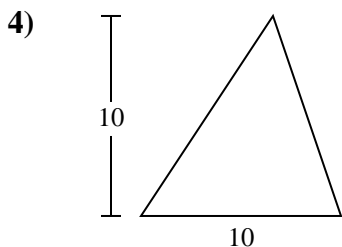
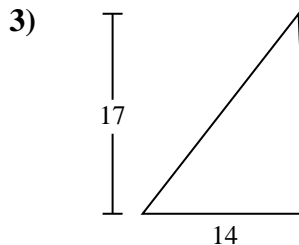
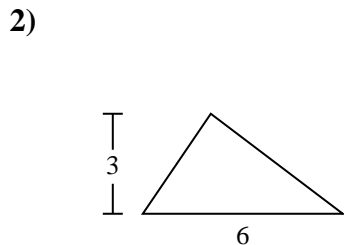
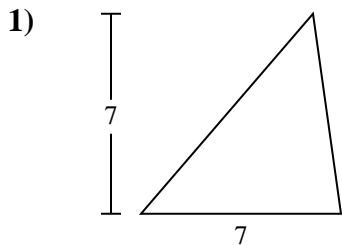
Trova l'area di ciascun triangoli. Le dimensioni non sono in scala.

**Risposte**1. 24,52. 93. 1194. 505. 1406. 367. 148. 127,59. 13,510. 9



Trova l'area di ciascun traingoli. Le dimensioni non sono in scala.

127,5	13,5	119	140	14
24,5	9	36	50	



**Risposte**

1. \_\_\_\_\_
2. \_\_\_\_\_
3. \_\_\_\_\_
4. \_\_\_\_\_
5. \_\_\_\_\_
6. \_\_\_\_\_
7. \_\_\_\_\_
8. \_\_\_\_\_
9. \_\_\_\_\_