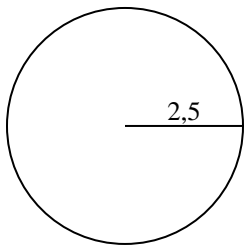


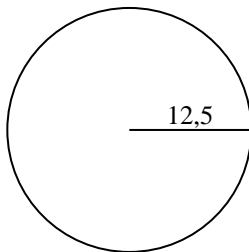


Calcola l'area di ogni cerchio. i cerchi non sono in scala.

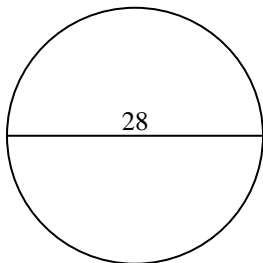
1)



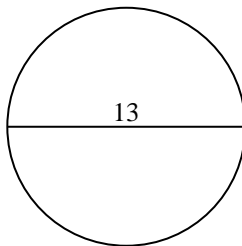
2)



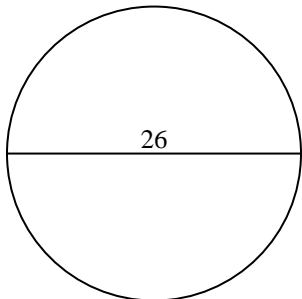
3)



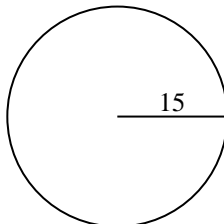
4)



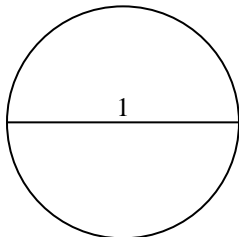
5)



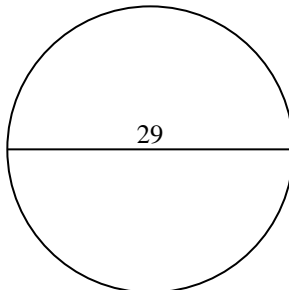
6)



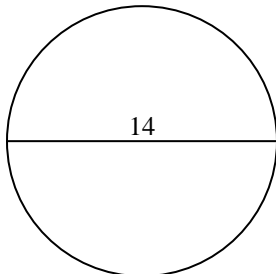
7)



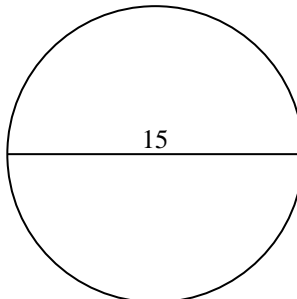
8)



9)



10)

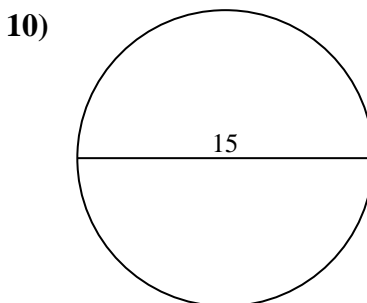
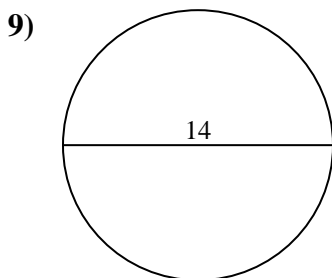
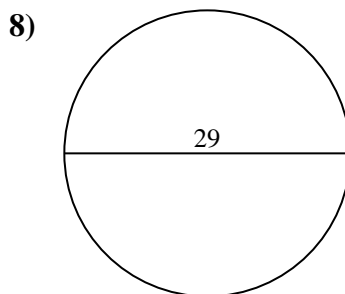
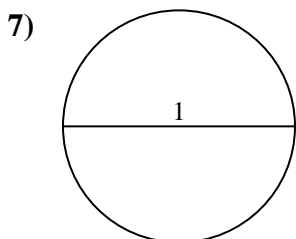
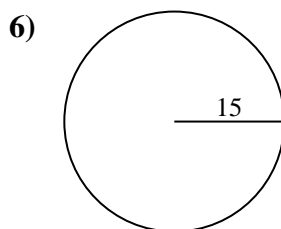
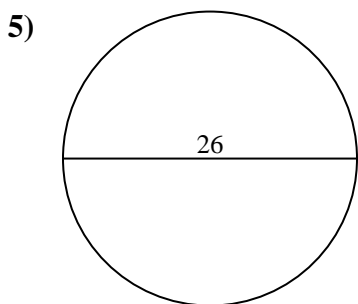
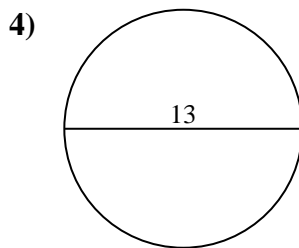
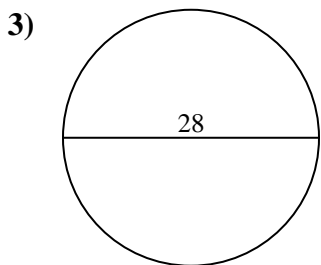
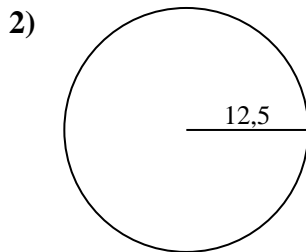
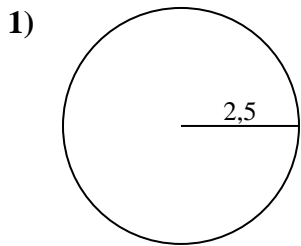


**Risposte**

- 1. \_\_\_\_\_
- 2. \_\_\_\_\_
- 3. \_\_\_\_\_
- 4. \_\_\_\_\_
- 5. \_\_\_\_\_
- 6. \_\_\_\_\_
- 7. \_\_\_\_\_
- 8. \_\_\_\_\_
- 9. \_\_\_\_\_
- 10. \_\_\_\_\_



Calcola l'area di ogni cerchio. i cerchi non sono in scala.

**Risposte**1. 19,62. 490,93. 615,84. 132,75. 530,96. 706,97. 0,88. 660,59. 153,910. 176,7



Calcola l'area di ogni cerchio. i cerchi non sono in scala.

490,9	615,8	706,9	132,7	153,9
19,6	530,9	0,8	660,5	

**Risposte**

- 1. \_\_\_\_\_
- 2. \_\_\_\_\_
- 3. \_\_\_\_\_
- 4. \_\_\_\_\_
- 5. \_\_\_\_\_
- 6. \_\_\_\_\_
- 7. \_\_\_\_\_
- 8. \_\_\_\_\_
- 9. \_\_\_\_\_

