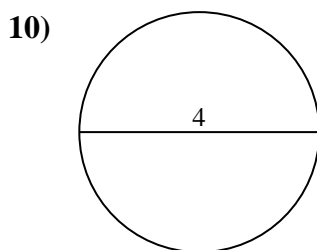
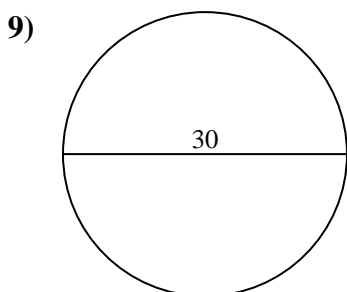
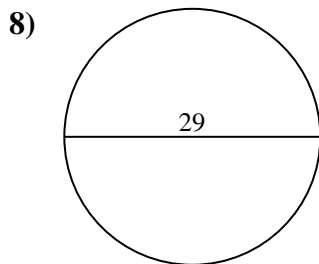
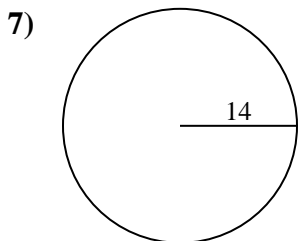
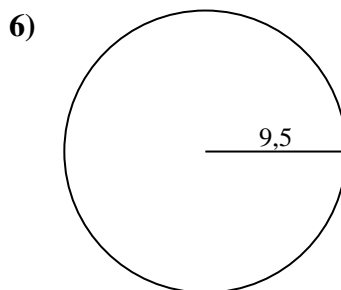
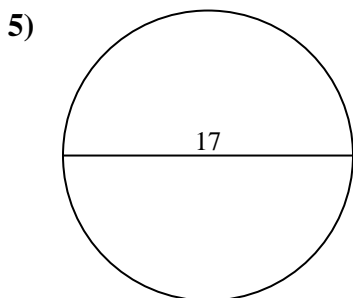
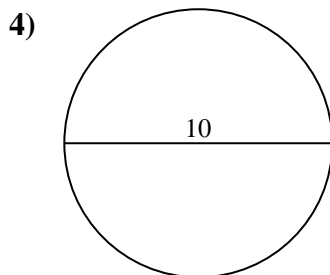
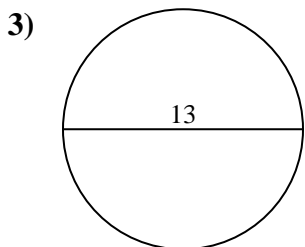
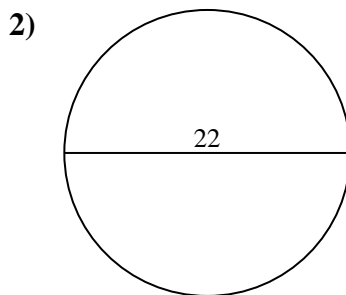
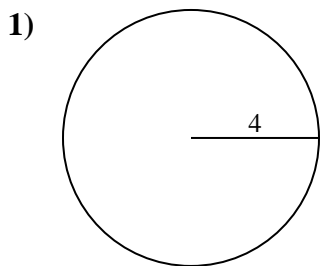




Calcola area e perimetro. Non sono in scala.

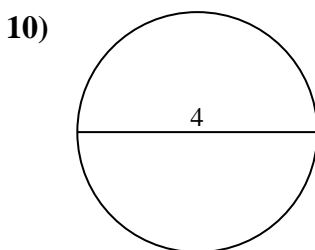
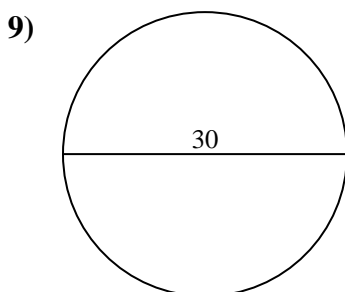
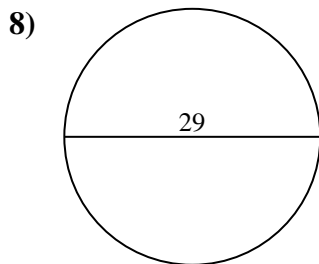
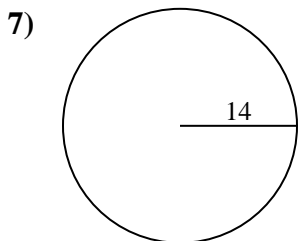
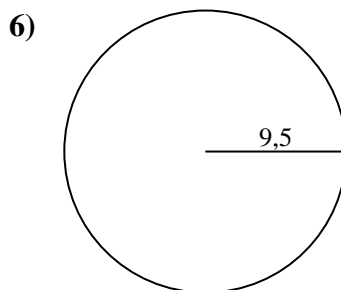
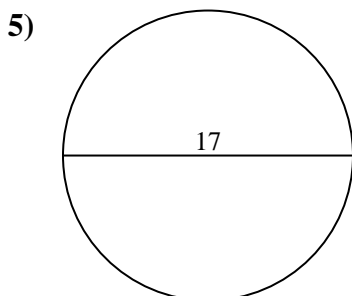
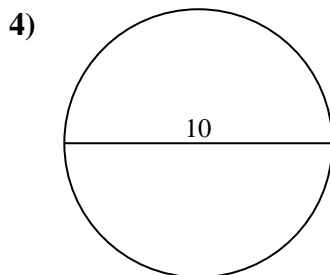
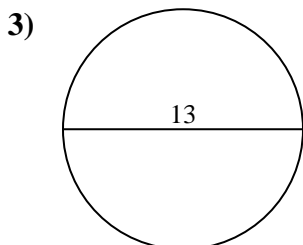
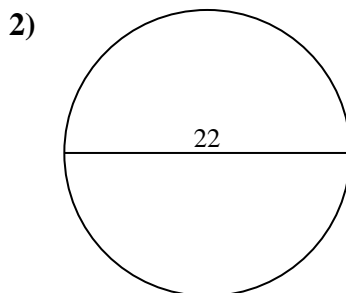
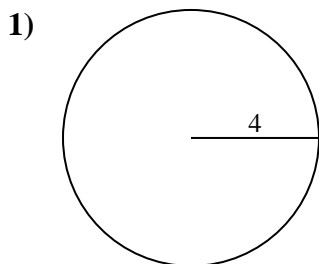


Risposte

- 1. _____
- 2. _____
- 3. _____
- 4. _____
- 5. _____
- 6. _____
- 7. _____
- 8. _____
- 9. _____
- 10. _____



Calcola area e perimetro. Non sono in scala.

**Risposte**

1.	<u>50,3</u>	<u>25,1</u>
2.	<u>380,1</u>	<u>69,1</u>
3.	<u>132,7</u>	<u>40,8</u>
4.	<u>78,5</u>	<u>31,4</u>
5.	<u>227</u>	<u>53,4</u>
6.	<u>283,5</u>	<u>59,7</u>
7.	<u>615,8</u>	<u>88</u>
8.	<u>660,5</u>	<u>91,1</u>
9.	<u>706,9</u>	<u>94,2</u>
10.	<u>12,6</u>	<u>12,6</u>



Calcola area e perimetro. Non sono in scala.

25,1	227	78,5	615,8	91,1
380,1	31,4	132,7	706,9	59,7
50,3	69,1	88	53,4	660,5
283,5	40,8	94,2		

Risposte

1. _____
2. _____
3. _____
4. _____
5. _____
6. _____
7. _____
8. _____
9. _____

