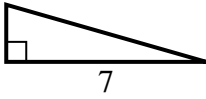


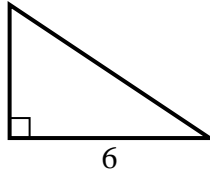


Trova il valore di X.

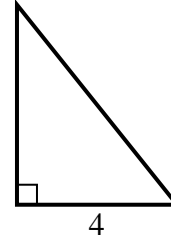
1) area = $7 u^2$



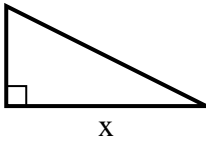
2) area = $12 u^2$



3) area = $10 u^2$



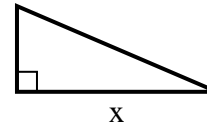
4) area = $16 u^2$



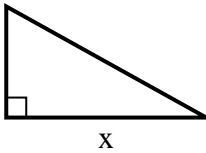
5) area = $18 u^2$



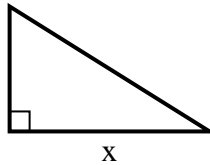
6) area = $10.5 u^2$



7) area = $22.5 u^2$



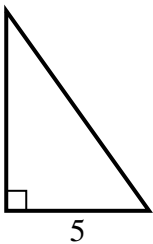
8) area = $20 u^2$



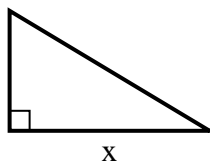
9) area = $5 u^2$



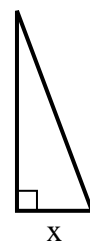
10) area = $17.5 u^2$



11) area = $7.5 u^2$



12) area = $12 u^2$



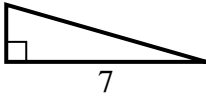
Risposte

1. _____
2. _____
3. _____
4. _____
5. _____
6. _____
7. _____
8. _____
9. _____
10. _____
11. _____
12. _____

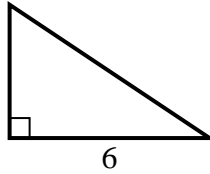


Trova il valore di X.

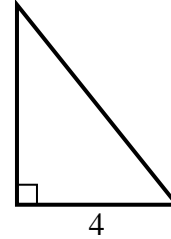
1) area = $7 u^2$



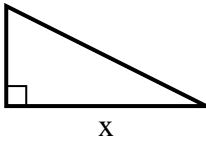
2) area = $12 u^2$



3) area = $10 u^2$



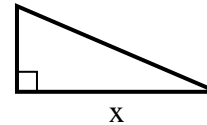
4) area = $16 u^2$



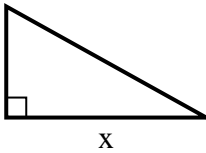
5) area = $18 u^2$



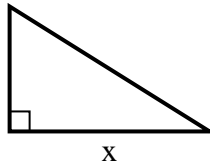
6) area = $10.5 u^2$



7) area = $22.5 u^2$



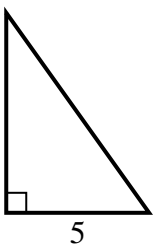
8) area = $20 u^2$



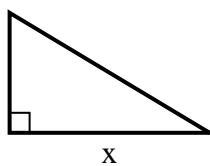
9) area = $5 u^2$



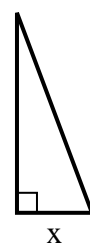
10) area = $17.5 u^2$



11) area = $7.5 u^2$



12) area = $12 u^2$



Risposte

1. 2

2. 4

3. 5

4. 8

5. 4

6. 7

7. 9

8. 8

9. 2

10. 7

11. 5

12. 3